



Addition et soustraction


Combien de taches a chaque coccinelle ? Résous les questions d'addition et de soustraction suivantes et dessine le nombre de taches qui en résulte pour chacune d'elles. Combien de taches a chaque coccinelle ? Résous les questions d'addition et de soustraction suivantes et dessine le nombre de taches qui en résulte pour chacune d'elles.




$$5+4=$$




$$2+7=$$




$$9-3=$$




$$6-2=$$




$$8+3=$$




$$7+5=$$



$$6-5=$$



$$7-4=$$



$$10+2=$$