



# Addition and Subtraction

How many spots has each ladybug? Resolve the next addition and subtraction questions and draw the resultant number of spots to each one.


MamyKit.com




$5+4=$




$2+7=$




$9-3=$




$6-2=$




$8+3=$




$7+5=$



$6-5=$



$7-4=$



$10+2=$